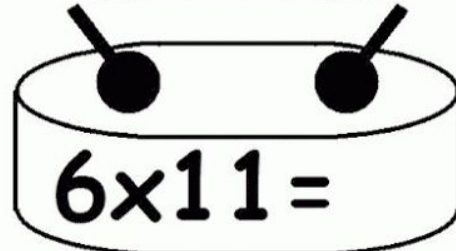
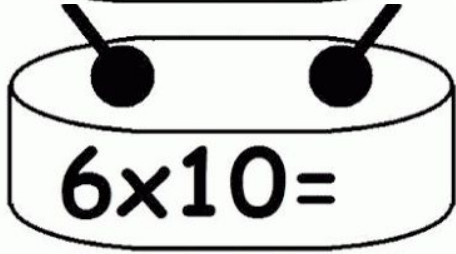
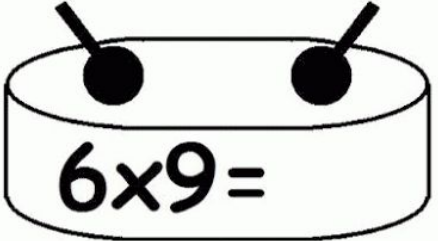
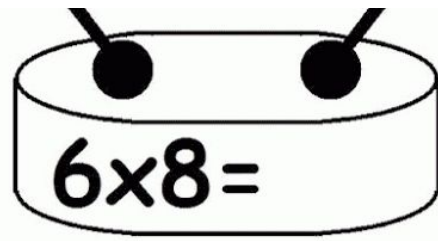
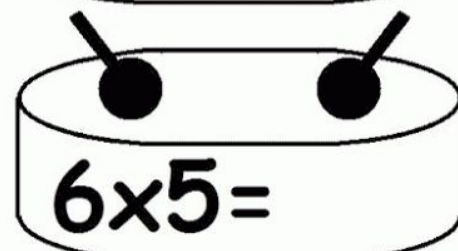
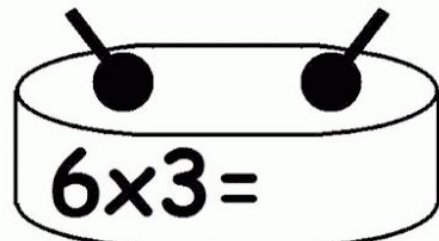


**SEND Maths Week 14**  
**13th - 17th July**



Can you complete this multiplication grid?

<b>X</b>		5	
10	100		
		25	
2			4

2 Match.

$394 + 200$

$50 + 345$

$268 + 31$

$111 + 257$

$400 + 138$

$272 + 300$

$299$

$368$


$572$

$395$

$594$

$538$

1) Match the numbers that add to 54



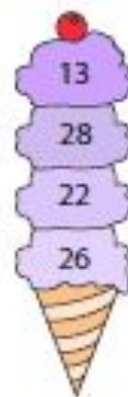
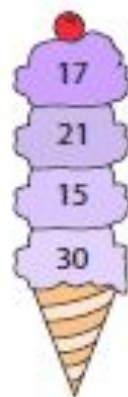
2) Match the numbers that add to 85



3) Match the numbers that add to 90



4) Match the numbers that add to 43



**Can you complete these number sequences?**

100	90	80			50	40				
-----	----	----	--	--	----	----	--	--	--	--

33	30	27	24		18	15					0
----	----	----	----	--	----	----	--	--	--	--	---

42	44	46		50	52					62	
----	----	----	--	----	----	--	--	--	--	----	--

Subtract 6 from 57.



$$\square - \square = \square$$

Subtract 8 from 88.



$$\square - \square = \square$$

**3** Subtract by counting back.

80	81	82	83	84	85	86	87	88	89
----	----	----	----	----	----	----	----	----	----

(a)  $84 - 2 =$

(b)  $87 - 5 =$

(c)  $89 - 6 =$

(d)  $86 - 6 =$



**4**

Fill in the blanks.

(a)  $19 - 2 =$

(b)  $37 - 6 =$

(c)  $46 - 6 =$

(d)  $68 - 5 =$

(e)  $78 - 4 =$

(f)  $98 - 3 =$